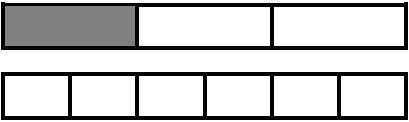


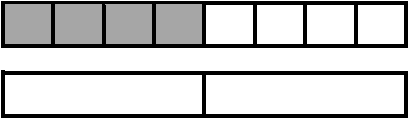

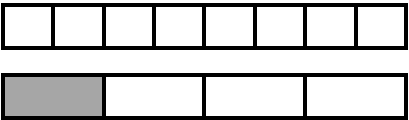


Shade the second model in each example to show equivalent fractions. Write words and numbers to make true equality statements.

<p>1.</p>  <p style="text-align: center;">_____ = _____</p> <p style="text-align: center;">_____ = _____.</p>	<p>2.</p>  <p style="text-align: center;">_____ = _____</p> <p style="text-align: center;">_____ = _____.</p>
<p>3.</p>  <p style="text-align: center;">_____ = _____</p> <p style="text-align: center;">_____ = _____.</p>	<p>4.</p>  <p style="text-align: center;">_____ = _____</p> <p style="text-align: center;">_____ = _____.</p>
<p>5.</p>  <p style="text-align: center;">_____ = _____</p> <p style="text-align: center;">_____ = _____.</p>	<p>6.</p>  <p style="text-align: center;">_____ = _____</p> <p style="text-align: center;">_____ = _____.</p>